

Name _____

Mark the for your answer.

Parent signature _____

1. Find the difference.

$$\begin{array}{r} 55 \\ -20 \\ \hline \end{array}$$

- 25
- 30
- 35
- 40

2. 2 tens 5 ones - 6 ones = ?

- 1 ten 0 ones
- 1 ten 9 ones
- 1 ten 7 ones
- 1 ten 5 ones

3. Subtract.

$$\begin{array}{r} 67 \\ -62 \\ \hline \end{array}$$

- 4
- 5
- 14
- 15

4. Find the difference.

$$\begin{array}{r} 59 \\ -39 \\ \hline \end{array}$$

- 20
- 29
- 30
- 39

5. Estimate the difference.

$$\begin{array}{r} 84\text{¢} \\ -21\text{¢} \\ \hline \end{array}$$

- about 70¢
- about 65¢
- about 60¢
- about 50¢

6. You had 35¢. You lost a dime. How much money do you have left?

- 10¢
- 15¢
- 20¢
- 25¢

7. Estimate the sum.

$$\begin{array}{r} 63\text{¢} \\ +29\text{¢} \\ \hline \end{array}$$

- about 0
- about 30¢
- about 80¢
- about 90¢

8.

$$40 - 10 + 8 =$$

- 18
- 28
- 38
- 48

Mark the for your answer.

9. Which is least?

- 65 - 3
- 65 - 23
- 65 - 33
- 65 - 43

10. Subtract.

$$\begin{array}{r} 91 \\ -75 \\ \hline \end{array}$$

- 16
- 26
- 27
- 61

11. Find the difference.

$$\begin{array}{r} 60 \\ -33 \\ \hline \end{array}$$

- 27
- 28
- 36
- 37

12. Subtract 40 from 84.

- 30
- 34
- 40
- 44

13. Find the difference.



$$\begin{array}{r} 37\text{¢} \\ -18\text{¢} \\ \hline \end{array}$$

- 9¢
- 18¢
- 19¢
- 29¢



14. Add or subtract from left to right.

$$50 + 21 - 9 =$$

- 48
- 60
- 62
- 79

15. Colleen has 80¢. She bought 2 . Each  cost 15¢. How much money did she have left?

- 50¢
- 60¢
- 65¢
- 70¢

16. Dan had a box of 64 . He gave 7 to Ryan and 8 to Laura. How many  did Dan have left?

- 56
- 57
- 48
- 49