

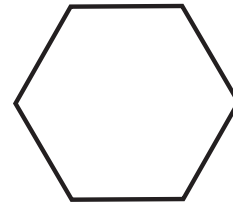
## Polygons

In this exercise set, you get to play a game of:




Look at each object and mark the correct box.

1



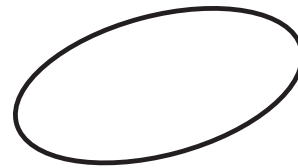
Polygon       NOT a Polygon

2



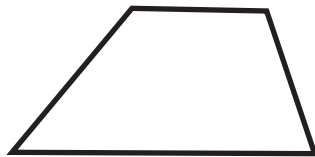
Polygon       NOT a Polygon

3




Polygon       NOT a Polygon

4



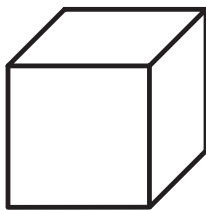
Polygon       NOT a Polygon

5




Polygon       NOT a Polygon

6



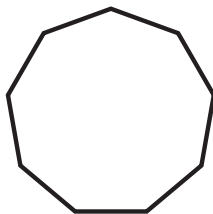
Polygon       NOT a Polygon

7



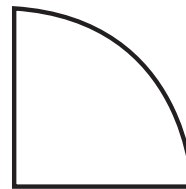
Polygon       NOT a Polygon

8



Polygon       NOT a Polygon

9



Polygon       NOT a Polygon